

## Model Test Paper 2022-2023

Max. Marks: 30

SCIENCE &amp; SOCIAL SCIENCE

Time: 30 minutes

**Instructions:****Read the questions carefully before you start writing.****Attempt all the questions.****SECTION A****SCIENCE****Q.1 Tick (✓) the correct answer:****[3]**

a) Which of the following is the habitat of Camel?

- (a) Desert (b) Pond (c) mountain (d) Polar region

b) The disease caused due to lack of vitamin C:

- (a) Scurvy (b) Goiter (c) Anaemia (d) Rickets

c) Animals which eat only plant are known as:

- (a) Omnivores (b) Autotrophs (c) Carnivores (d) Herbivores

**Q.2 Give one word answer:****[2]**

a) Fish breathes with the help of \_\_\_\_\_

b) The plant that grows in the desert: \_\_\_\_\_

c) Name a sugar producing plant: \_\_\_\_\_

d) The disease that cause due to lack of vitamin C: \_\_\_\_\_

**Q.3 Answer the following questions:**

a) How do plants make their food?

**[1]****Ans:** \_\_\_\_\_  
\_\_\_\_\_

b) Why do we eat green vegetables and other food items?

**[1]****Ans:** \_\_\_\_\_  
\_\_\_\_\_  
\_\_\_\_\_

**Q.4 Answer in brief:**

**[2]**

a) Why should we keep ourselves and surrounding clean?

---

---

---

---

b) When do we fall ill?

---


---

---

---

**Q-5. Draw the diagram of a PLANT and label its parts..**

**[1]**



**Q-6. Name any four objects made up of the following material:**

**[5]**

- a) Wood: \_\_\_\_\_, \_\_\_\_\_, \_\_\_\_\_, \_\_\_\_\_.
- b) Plastic: \_\_\_\_\_, \_\_\_\_\_, \_\_\_\_\_, \_\_\_\_\_.
- c) Leather: \_\_\_\_\_, \_\_\_\_\_, \_\_\_\_\_, \_\_\_\_\_.
- d) Iron: \_\_\_\_\_, \_\_\_\_\_, \_\_\_\_\_, \_\_\_\_\_.
- e) Cotton: \_\_\_\_\_, \_\_\_\_\_, \_\_\_\_\_, \_\_\_\_\_.

**SECTION B**  
**SOCIAL SCIENCE**

**Q. 1 Fill in the blanks:**

[4]

- 1) Indian city which is also known as pink city : \_\_\_\_\_
- 2) People who live in forest are also called : \_\_\_\_\_
- 3) Thar desert is located in the state of : \_\_\_\_\_
- 4) Golconda fort is located in the state of : \_\_\_\_\_

**Q.2 Choose the correct answer and write in the given box.**

[3]

1) If there is no rainfall for many years, there can be....

- (a) Flood (b) Drought (c) Earthquake (d) Tsunami

2) Who always preached about cleanliness?

- (a) Sardar Patel (b) Jawaharlal Nehru (c) Mahatma Gandhi (d) Rahul Gandhi

3) Under whose leadership the constitution of India was prepared?

- (a) Bhim Rao Ambedkar (b) Sardar Patel (c) Narendra Modi (d) Subhash Chandra Bose

**Q.3 Answer the following questions:**

[4]

1. What problems are faced by farmers when there is no rainfall?

---

---

---

---

2. How can we protect forests? Write any two ways to do so.

---

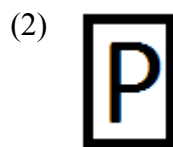
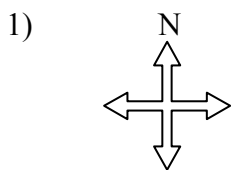
---

---

---

**Q. 4 Identify the following symbols used in maps.**

(2)



\_\_\_\_\_

\_\_\_\_\_

3)



---

4)



---

Q-5 Write any two differences between desert and forest.

(2)

<b>DESERT</b>	<b>FOREST</b>